

Electromagnetism III: Magnetostatics

Chapters 4 and 6 of Purcell cover DC circuits and magnetostatics, as does chapter 5 of Griffiths. For advanced circuits techniques, see chapter 9 of Wang and Ricardo, volume 2. Chapter 5 of Purcell famously derives magnetic forces from Coulomb's law and relativity. It's beautiful, but not required to understand chapter 6; we will cover relativistic electromagnetism in depth in **R3**. For further discussion, see chapters II-12 through II-15 of the Feynman lectures. There is a total of **79** points.

1 Static DC Circuits

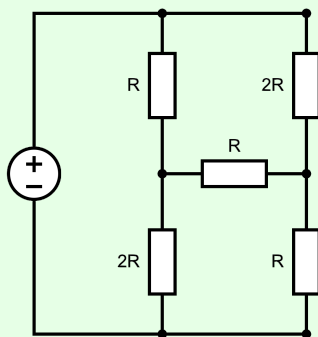
We continue with DC circuits, in more complex setups than in **E2**.

Idea 1

When analyzing circuits, it is sometimes useful to parametrize the currents in the circuits in terms of the current in each independent loop. This is typically more efficient, because it enforces Kirchoff's junction rule automatically, leading to fewer equations.

Example 1: Wheatstone Bridge

Find the current through the following circuit, if the battery has voltage V .



Solution

This circuit can't be simplified using series and parallel combinations, so instead we use Kirchoff's rules directly. From the diagram, we see the circuit has three loops. Let I_1 be the clockwise current on the left loop, I_2 be the clockwise current through the top-right loop, and I_3 be the clockwise current through the bottom-right loop. For instance, this means that the current flowing downward through the top-left resistor is $I_1 - I_2$.

The three Kirchoff's loop rule equations are

$$3I_1R - I_2R - 2I_3R = V,$$

$$4I_2R - I_1R - I_3R = 0,$$

$$4I_3R - 2I_1R - I_2R = 0.$$

Adding the last two equations shows that

$$I_1 = I_2 + I_3$$

and plugging this back in shows that $3I_2 = 2I_3$, so we have

$$I_2 = \frac{2}{5}I_1, \quad I_3 = \frac{3}{5}I_1.$$

Since the answer to the question is just I_1 , we can now plug this back into the first equation,

$$\frac{V}{R} = 3I_1 - I_2 - 2I_3 = \left(3 - \frac{2}{5} - \frac{6}{5}\right) I_1 = \frac{7}{5}I_1.$$

This gives the answer, $5V/7R$.

Incidentally, the circuit above is also called a [Wheatstone bridge](#). We note that the current through the middle resistor is zero when the ratios between the top and bottom resistances match on both sides of it. Hence if three of these outer resistances are known, we can adjust one of them until the current through the middle resistor vanishes, thereby measuring the fourth resistor.

Idea 2

Since Kirchoff's loop equations are linear, currents and voltages in a DC circuit with multiple batteries can be found by superposing the currents and voltages due to each battery alone.

Idea 3: Thevenin's Theorem and Norton's Theorem

Consider any system of batteries and resistors, with two external terminals A and B . Suppose that when a current I is sent into A and out of B , then a voltage difference $V = V_A - V_B$ appears. From an external standpoint, the function $V(I)$ is all we can measure.

Now, by the linearity of Kirchoff's rules, $V(I)$ is a linear function, so we can write

$$V(I) = V_{\text{eq}} + IR_{\text{eq}}.$$

In other words, $V(I)$ is exactly the same as if the entire system were a resistor R_{eq} in series with a battery with emf V_{eq} (with the positive end pointing towards A). This generalizes the idea of replacing a system of resistors with an equivalent resistance, and is known as Thevenin's theorem.

We can also flip this around. Note that $I(V)$ must also be a linear function, and we can write

$$I(V) = I_{\text{eq}} + \frac{V}{R_{\text{eq}}}.$$

This is precisely the $I(V)$ of an ideal current source I_{eq} (sending current towards B) in parallel with a resistor R_{eq} . (An ideal current source makes a fixed current flow through it, just like a battery creates a fixed voltage across it.) This is known as Norton's theorem.

Since these functions are inverses of each other, you can see that the R_{eq} 's in both equations above are the same (both are equal to the ordinary equivalent resistance), and $V_{\text{eq}} = -I_{\text{eq}}R_{\text{eq}}$.

Example 2

Consider some batteries connected in parallel, with emfs \mathcal{E}_i and internal resistances R_i . What is the Thevenin equivalent of this circuit?

Solution

The equivalent resistance is simply

$$R_{\text{eq}} = \left(\sum_i \frac{1}{R_i} \right)^{-1}.$$

To infer V_{eq} , we just need one more $V(I)$ value. The most convenient is to set $V = 0$, shorting all of the batteries. Each battery alone would produce a current of \mathcal{E}_i/R_i , so

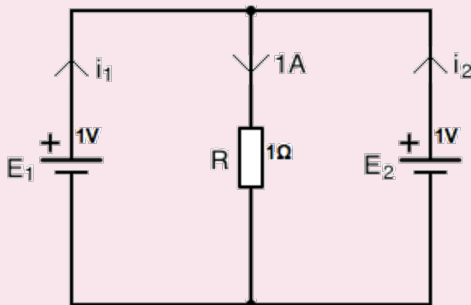
$$0 = V_{\text{eq}} + \left(\sum_i \frac{\mathcal{E}_i}{R_i} \right) R_{\text{eq}}.$$

Thus, we have

$$V_{\text{eq}} = \left(\sum_i \frac{\mathcal{E}_i}{R_i} \right) \left(\sum_j \frac{1}{R_j} \right)^{-1}.$$

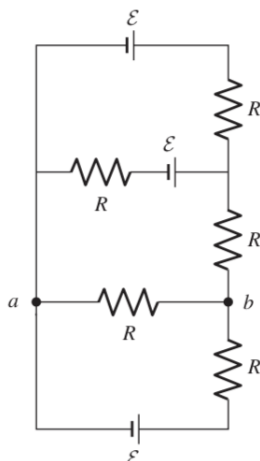
Remark

With ideal batteries, it's easy to set up circuits that don't make any sense.



For example, in the above circuit, Kirchoff's rules don't determine the currents; they only say that $i_1 + i_2 = 1 \text{ A}$. If the emfs of the batteries were different, the situation would be even worse: the equations would be contradictory, with no solution at all! In real life, this is avoided because all batteries have some internal resistance. Adding such a resistance to each battery, no matter how small, resolves the problem and gives a unique solution.

[2] **Problem 1** (Purcell 4.12). Consider the circuit below.



- (a) Find the potential difference between points a and b .
- (b) Find the equivalent Thevenin resistance and emf between points a and b .

Solution. (a) We'll use loop currents, with positive being clockwise. Let the loop currents be I_1, I_2, I_3 , from top to bottom. We see that

$$\begin{aligned}\mathcal{E} - \mathcal{E} - 2RI_1 + RI_2 &= 0 \\ \mathcal{E} - 3RI_2 + RI_3 + RI_1 &= 0 \\ -\mathcal{E} - 2RI_3 + RI_2 &= 0,\end{aligned}$$

or

$$\begin{aligned}I_2 &= 2I_1 \\ 3I_2 - I_3 - I_1 &= \mathcal{E}/R \\ I_2 - 2I_3 &= \mathcal{E}/R.\end{aligned}$$

This can be solved to give $I_1 = \mathcal{E}/8R$, $I_2 = \mathcal{E}/4R$, and $I_3 = -3\mathcal{E}/8R$. We see that $V_b - V_a = (I_2 - I_3)R = \boxed{5\mathcal{E}/8}$.

- (b) We'll do this in two ways for variety. First, note that we already found the voltage between a and b in part (a), and this is precisely the Thevenin emf, $V_{\text{eff}} = 5\mathcal{E}/8$. The Thevenin resistance is simply the equivalent resistance between a and b . By a straightforward application of the series and parallel rules, this is $R_{\text{eff}} = \boxed{3R/8}$.

Second, suppose we short points a and b with a wire. Then by Thevenin's theorem, the current flowing through that wire should be $I = V_{\text{eff}}/R_{\text{eff}}$. We already know V_{eff} from part (a). To compute the current, we just use Kirchoff's loop rules again; these are now as follows.

$$\begin{aligned}\mathcal{E} - \mathcal{E} - 2RI_1 + RI_2 &= 0 \\ \mathcal{E} - 2RI_2 + RI_1 &= 0 \\ -\mathcal{E} - RI_3 &= 0\end{aligned}$$

Solving these equations gives $I_1 = \mathcal{E}/3R$, $I_2 = 2\mathcal{E}/3R$, and $I_3 = -\mathcal{E}/R$. The current through the wire is now $I_2 - I_3 = 5\mathcal{E}/3R$. Thus, $R_{\text{eff}} = (5\mathcal{E}/8)/(5\mathcal{E}/3R) = 3R/8$.

- [2] **Problem 2** (Wang). A circuit containing batteries and resistors has two terminals. When an ideal ammeter is connected between them, the reading is I_1 . When a resistor R is connected between them, the current through the resistor is I_2 , in the same direction. What would be the reading V of an ideal voltmeter connected between them?

Solution. We consider the Thevenin equivalent, i.e. the function $V(I)$. The first piece of information tells us that when $V = 0$, $I = I_1$. The second tells us that when $V = -I_2R$, then $I = I_2$. Thus,

$$0 = V_{\text{eq}} + I_1 R_{\text{eq}}, \quad -I_2 R = V_{\text{eq}} + I_2 R_{\text{eq}}.$$

Solving this system of equations gives

$$V_{\text{eq}} = \frac{I_1 I_2 R}{I_2 - I_1}, \quad R_{\text{eq}} = \frac{I_2 R}{I_1 - I_2}.$$

When an ideal voltmeter is connected, we have $I = 0$, so

$$V = V_{\text{eq}} = \frac{I_1 I_2 R}{I_2 - I_1}.$$

Note that your answer may differ by a harmless sign, which ultimately depends on your sign conventions for I_1 and I_2 (i.e. which terminal is A and which terminal is B).

- [3] **Problem 3.**  USAPhO 2015, problem A2.

Now we give a few problems on current flow through continuous objects. Fundamentally, all one needs for these problems is the definition $\mathbf{J} = \sigma \mathbf{E}$, and superposition.

Example 3

Consider two long, concentric cylindrical shells of radii $a < b$ and length L . The volume between the two shells is filled with material with conductivity $\sigma(r) = k/r$. What is the resistance between the shells, and the charge density?

Solution

To find the resistance, we compute the current I when a voltage V is applied between the shells. By symmetry, in the steady state the current density must be

$$\mathbf{J}(\mathbf{r}) = \frac{I}{2\pi r L} \hat{\mathbf{r}}.$$

On the other hand, we also know that

$$V = \int \mathbf{E} \cdot d\mathbf{r} = \int_a^b \frac{I}{2\pi r L \sigma} dr = \frac{I(b-a)}{2\pi k L}$$

from which we conclude

$$R = \frac{b-a}{2\pi k L}.$$

Note that the radial electric field between the shells is constant, so

$$\mathbf{E}(\mathbf{r}) = \frac{V}{b-a} \hat{\mathbf{r}}.$$

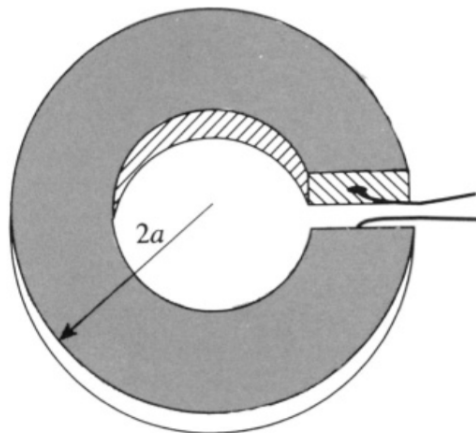
This means that in the steady state, there must be a nonzero charge density between the shells. (If there weren't, then we would have $E(r) \propto 1/r$, rather than a constant.)

To find the charge density explicitly, it's easiest to use Gauss's law in differential form in cylindrical coordinates. We use the form of the divergence derived in **E1**,

$$\nabla \cdot \mathbf{E} = \frac{1}{r} \frac{\partial(rE_r)}{\partial r} + (\text{other terms}) = \frac{1}{r} \frac{V}{b-a} = \frac{\rho}{\epsilon_0}$$

thus showing that the charge density is proportional to $1/r$. Of course, we could also get this result by applying Gauss's law in integral form, to concentric spheres.

- [2] **Problem 4** (Grad). A washer is made of a material of resistivity ρ . It has a square cross section of length a on a side, and its outer radius is $2a$. A small slit is made on one side and wires are connected to the faces exposed.



Find the resistance of the washer. (Hint: first argue that no current flows radially.)

Solution. As suggested, we'll first show that there is no radial current. Suppose there was. Then, if we swap the sign of the current, the direction should flip, say from outward to inward. But flipping the sign of the current can also be achieved by simply flipping the disk over, which *does not* change the direction of the radial current. So the radial current must be zero.

Now, we split the washer into a bunch of radial rings with width dr . We see that r ranges from a to $2a$. Each little ring has resistance $\rho(2\pi r)/(adr)$, and they are all effectively connected in parallel. Thus,

$$\frac{1}{R} = \int_a^{2a} \rho^{-1} \frac{a}{2\pi r} dr = \rho^{-1} \frac{a}{2\pi} \log 2,$$

giving the answer,

$$R = \frac{2\pi \rho}{\log 2 a}.$$

- [3] **Problem 5** (BAUPC 1995). An electrical signal can be transferred between two metallic objects buried in the ground, where the current passes through the Earth itself. Assume that these objects are spheres of radius r , separated by a horizontal distance $L \gg r$, and suppose both objects are buried a depth much greater than L in the ground. If the Earth has uniform resistivity ρ , find the approximate resistance between the terminals. (Hint: consider the superposition principle.)

Solution. We can consider one object at a time, and then use superposition to find the combined effect of both. Suppose that current I comes out from one of the objects. Placing this object at the origin, we have

$$\mathbf{J} = \frac{I}{4\pi r^2} \hat{\mathbf{r}}, \quad \mathbf{E} = \frac{\rho I}{4\pi r^2} \hat{\mathbf{r}}.$$

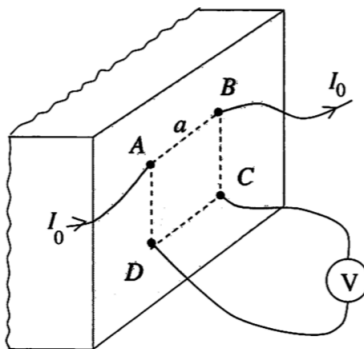
Therefore, the potential difference between this object and where the other object would be is

$$V = \frac{\rho I}{4\pi} \int_r^L \frac{1}{r^2} \approx \frac{\rho I}{4\pi r}$$

where we used $r \ll L$. Finally, the other object takes in current I , with its \mathbf{J} , \mathbf{E} , and V superposing with the first object. Thus, the total potential difference is $\rho I/2\pi r$, so

$$R = \frac{V}{I} = \frac{\rho}{2\pi r}.$$

- [3] **Problem 6** (PPP 162). A plane divides space into two halves. One half is filled with a homogeneous conducting medium, and physicists work in the other. They mark the outline of a square of side a on the plane and let a current I_0 in and out at two of its neighboring corners. Meanwhile, they measure the potential difference V between the two other corners.



Find the resistivity ρ of the medium.

Solution. Consider the case where there is current coming in just at A . Then, \mathbf{J} is always radial with respect to A , and has magnitude

$$J \cdot 2\pi r^2 = I_0 \implies J = \frac{I_0}{2\pi r^2}.$$

Then we have that

$$\mathbf{E} = \frac{I_0}{2\pi\sigma r^2} \hat{\mathbf{r}}$$

where σ is the conductivity of the material. Then, we have that

$$V_D - V_C = \int_a^{\sqrt{2}a} \frac{I_0}{2\pi\sigma r^2} dr = \frac{I_0}{2\pi\sigma a} (1 - 1/\sqrt{2}).$$

Similarly, for the case where the current is coming out of B . Then, again in this case we also have that

$$V_D - V_C = \frac{I_0}{2\pi\sigma a} (1/\sqrt{2} - 1) = \frac{I_0}{2\pi\sigma a} (1 - 1/\sqrt{2}).$$

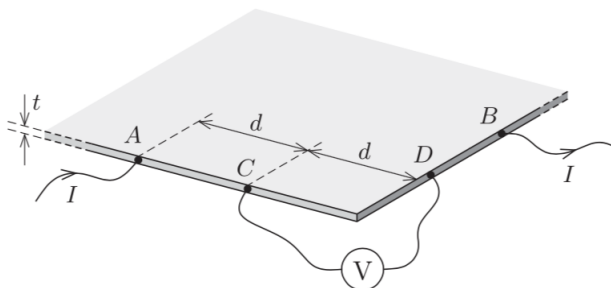
Thus, superposing these two states, we have that

$$\Delta V = \frac{I_0 \rho}{2\pi a} (2 - \sqrt{2})$$

where $\rho = 1/\sigma$ is the resistivity. Then,

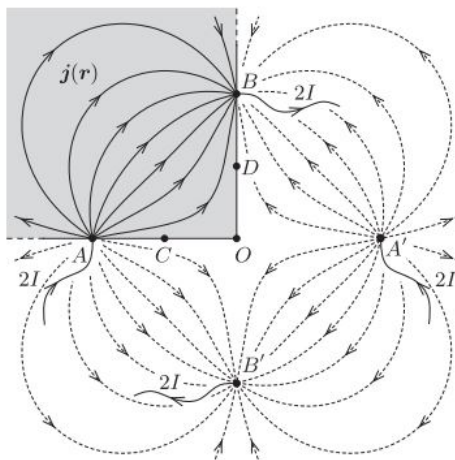
$$\rho = \frac{2\pi a \Delta V}{I_0 (2 - \sqrt{2})} = \frac{\pi a (2 + \sqrt{2}) \Delta V}{I_0}$$

- [3] **Problem 7** (MPPP 174). We aim to measure the resistivity of the material of a large, thin, homogeneous square metal plate, of which only one corner is accessible. To do this, we chose points A, B, C and D on the side edges of the plate that form the corner.



Points A and B are both $2d$ from the corner, whereas C and D are each a distance d from it. The length of the plate's sides is much greater than d , which, in turn, is much greater than the thickness t of the plate. If a current I enters the plate at point A, and leaves it at B, then the reading on a voltmeter connected between C and D is V . Find the resistivity ρ of the plate material.

Solution. The reason this problem is a lot harder than the previous one is that there is a boundary condition, namely that the current density at the edges of the plate is parallel to the plate. The key insight here is that we can do an “image current” configuration as follows to automatically satisfy the boundary condition.



Here, the plate is now infinite, and we have a new current source and sink respectively at the reflections of A and B in O. Now, if a current $2I$ enters the plate, the current at a distance r is $\frac{2I}{2\pi r t}$, so the electric field at a distance r is $\frac{\rho I}{\pi r t}$ (pointing radially outward), so the potential is $\frac{\rho I}{\pi t} \log(r/r_0)$ for some arbitrary r_0 . For our purposes, set the potential to be 0 at O, so $r_0 = AO$. Now,

$$V_C = \frac{\rho I}{\pi t} (\log(r_0/d) + \log(r_0/3d) - 2\log(r_0/\sqrt{5}d)) = \frac{\rho I}{\pi t} \log(5/3).$$

By symmetry, $V_C = -V_D$. Thus,

$$V = 2V_C = \frac{2\rho I}{\pi t} \log(5/3),$$

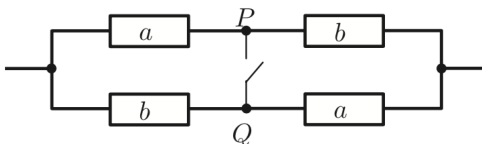
$$\text{so } \rho = \boxed{\frac{\pi t}{2 \log(5/3)} \frac{V}{I}}.$$

Remark

Setups like those in the previous two problems are commonly used to measure resistivities, but why do they use a complicated “four terminal” setup? Wouldn’t it have been easier to just attach two terminals, send a current I through them, and measure the voltage drop V ? The problem with this is that it also picks up the resistance R of the contacts between the terminals and the material, along with the resistances of the wires. By having a pair of terminals measure voltage alone, drawing negligible current, we avoid this problem.

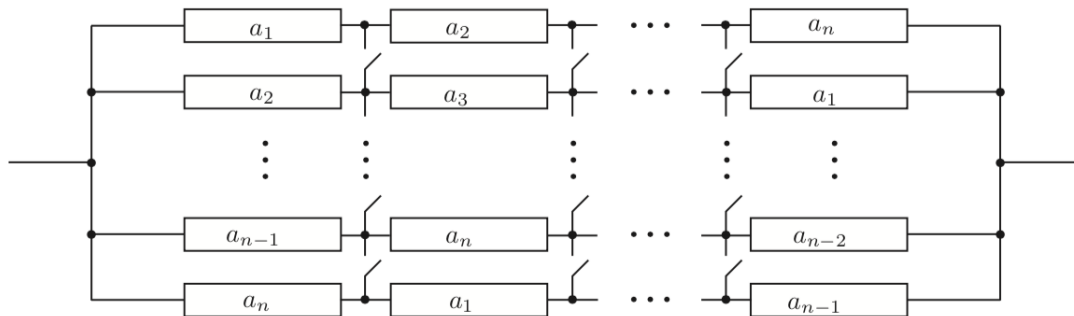
[4] **Problem 8.** [A] This problem is just for fun; the techniques used here are too advanced to appear on Olympiads. We will prove Rayleigh’s monotonicity law, which states that increasing the resistance of any part of a resistor network increases the equivalent resistance between any two points. This may seem obvious, but it’s actually tricky to prove. The following is the slickest way.

- Consider a graph of resistors, where a battery is attached across two of the vertices, fixing their voltages. Write an expression for the total power dissipated, assuming the voltages at each vertex are V_i and the resistances are R_{ij} .
- The voltages V_i at all the other vertices are determined by Kirchoff’s rules. But suppose you didn’t know that, or didn’t want to set up those equations. Remarkably, it turns out that you can derive the exact same results by simply treating the voltages V_i as free to vary, and setting them to minimize the total power dissipated! Show this result. (This is an example of a variational principle, like the principle of least action in mechanics.)
- For any network of resistors, show that $P = V^2/R$ when V is the battery voltage applied across two vertices, R is the equivalent resistance between them, and P is the total power dissipated in the resistors. (This is intuitive, but it’s worth showing in detail to assist with the next part.)
- By combining all of these results, prove Rayleigh’s monotonicity law.
- We can use Rayleigh’s monotonicity law to prove some mathematical results. Consider the resistor network shown below, where the variables label the resistances.



By considering the resistances before and after closing the switch PQ , show that the arithmetic mean of two numbers is at least the geometric mean.

- (f) Consider the resistor network shown below.



By closing all the switches, show that the arithmetic mean of n numbers is at least the harmonic mean.

Solution. (a) The power is

$$P = \sum_{i < j} \frac{(V_i - V_j)^2}{R_{ij}}.$$

Here the sum over $i < j$ counts all pairs of vertices once. If there is no direct connection between i and j , the resistance R_{ij} is infinite.

- (b) The power is minimized when its derivative is zero, and we are free to vary all voltages except for the two points where the battery is connected. Let V_i be one of these voltages. Then

$$\frac{\partial P}{\partial V_i} = \sum_{j \neq i} \frac{2(V_i - V_j)}{R_{ij}} = 0.$$

Now compare this to how we would solve the problem using Kirchoff's laws. The fact that the sum of the voltage drops along a loop is zero is already accounted for, because we already have specified the voltages at each vertex. The only new equations we would write down would be charge conservation at each vertex,

$$\sum_{j \neq i} I_{ij} = 0.$$

However, applying Ohm's law, we see this is precisely the equation that power minimization has given us!

- (c) By the definition of the equivalent resistance, $V = IR$ where I is the total current going through the circuit. By the definition of power, the power put in by the battery is $P = IV$, since any current going through the circuit must go through the battery. By conservation of energy, the power dissipated in the circuit is equal to the power put in by the battery. So the power dissipated is $P = IV = V^2/R$.
- (d) Put a battery of voltage V across the points we are considering. By part (c) Rayleigh's monotonicity law is equivalent to the statement that, if we increase any of the R_{ij} , the total power P dissipated in the resistor network goes down.

We can account for the effect of increasing one of the R_{ij} in two steps. First, suppose we do so while artificially keeping all the voltages V_i constant. Then by part (a), P decreases.

Second, in reality the voltages quickly rearrange themselves to satisfy Kirchoff's laws, which we saw in part (b) is equivalent to minimizing the power. So this further rearrangement can only further decrease P . This shows the desired result.

(e) Before closing the switch, the resistance is

$$R_i = \frac{a+b}{2}.$$

After closing the switch, the resistance is

$$R_f = 2 \left(\frac{1}{a} + \frac{1}{b} \right)^{-1} = \frac{2ab}{a+b}.$$

Closing the switch is equivalent to decreasing R_{PQ} from infinity to zero, so $R_f \leq R_i$ by Rayleigh's monotonicity law. This gives

$$\sqrt{ab} \leq \frac{a+b}{2}$$

which is the AM-GM inequality.

(f) Before closing the switches,

$$R_i = \frac{1}{n} \sum_i a_i$$

which is the arithmetic mean. After closing the switches,

$$R_f = n \left(\sum_i \frac{1}{a_i} \right)^{-1}$$

which is the harmonic mean. Thus, the arithmetic mean is at least the harmonic mean.

Remark

You might think that Rayleigh's monotonicity law is too obvious to require a proof; if you decrease a resistance, how could the net resistance possibly go up? In fact, this kind of non-monotonicity occurs very often! For example, [Braess's paradox](#) is that fact that adding more roads can slow down traffic, even when the total number of cars stays the same. A U.S. Physics Team coach [has argued](#) that allowing more team strategies can make a basketball team score less. For more on this subject, see the paper [Paradoxical behaviour of mechanical and electrical networks](#) or [this video](#).

Remark

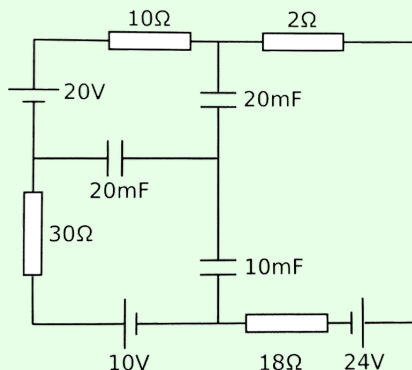
Circuit questions can get *absurdly* hard, but at some point they start being more about mathematical tricks than physics. As a result, I haven't included any such problems here; they tend not to appear on the USAPhO or IPhO, or in college physics, or in real life, or really anywhere besides a few competitions. On the other hand, you might find such questions fun! For some examples, see the Physics Cup problems [2013.6](#), [2017.2](#), [2018.1](#), and [2019.4](#).

2 RC Circuits

Next we'll briefly cover RC circuits, our first exposure to a situation genuinely changing in time.

Example 4: CPhO

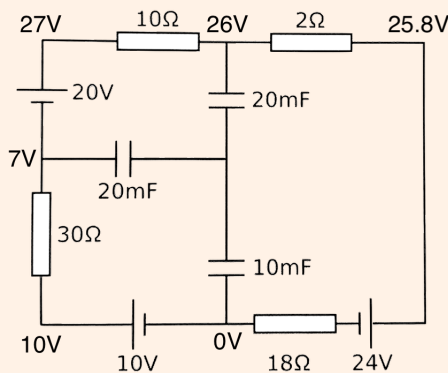
The capacitors in the circuit shown below were initially neutral. Then, the circuit is allowed to reach the steady state.



After a long time, what is the charge stored on the 10 mF capacitor?

Solution

After a long time, no current flows through the capacitors, so there is effectively a single loop in the circuit. It has a total resistance $60\ \Omega$ and a total emf $6\ \text{V}$, so the current is $I = 0.1\ \text{A}$. Using this, we can straightforwardly label the voltages everywhere on the outer loop.



To finish the problem, we need to know the voltage V_0 of the central node, so we need one more equation. That equation is charge conservation: the fact that the central part of the circuit, containing the inner plates of the three capacitors, begins and remains uncharged. Suppressing units, this means

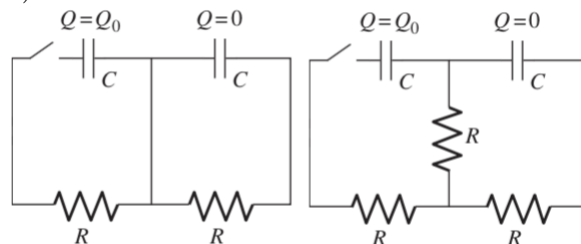
$$20(26 - V_0) + 20(7 - V_0) + 10(0 - V_0) = 0, \quad V_0 = \frac{66}{5}\ \text{V}$$

from which we read off the answer,

$$Q = CV = 0.132\ \text{C}.$$

[3] **Problem 9.** ⌚ USAPhO 1997, problem A3.

[3] **Problem 10** (Purcell 4.18). Consider the two RC circuits below.



- (a) The circuit shown below contains two identical capacitors and two identical resistors, with initial charges as shown above at left. If the switch is closed at $t = 0$, find the charges on the capacitors as functions of time.
- (b) Now consider the same setup with an extra resistor, as shown above at right. Find the maximum charge that the right capacitor achieves. (Hint: the methods of **M4** can be useful.)

Solution. (a) Let the two loop currents be I_1 and I_2 , both counterclockwise. The loop equations are $Q_1/C = I_1R$ and $Q_2/C = I_2R$. We also have $I_k = -\dot{Q}_k$. Thus, $Q_k + RC\dot{Q}_k = 0$ for $k = 1, 2$. Based on the initial conditions, we see then that the solutions are $Q_1(t) = Q_0e^{-t/RC}$ and $Q_2(t) = 0$. (The simple reason $Q_2(t)$ is zero is because the middle wire effectively shorts out the right half of the circuit.)

- (b) Again, with the same setup of variables, we get that

$$\begin{aligned} Q_1/C - 2I_1R + I_2R &= 0 \\ Q_2/C - 2I_2R + I_1R &= 0. \end{aligned}$$

This is a system of two linear differential equations, which can be solved using the methods of **M4**. However, in this case we can just add and subtract the equations, giving

$$(Q_1 + Q_2)/C - (I_1 + I_2)R = 0, \quad (Q_1 - Q_2)/C - 3(I_1 - I_2)R = 0.$$

That is, the sum of the two acts like an RC circuit with time constant RC , while the difference acts like one with time constant $3RC$. (These are the “normal modes”.) By superposing these solutions and fitting the initial conditions, we get

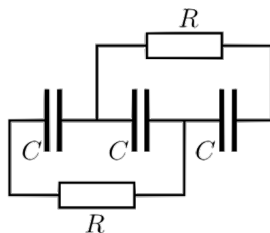
$$Q_1(t) = \frac{Q_0}{2}(e^{-t/RC} + e^{-t/3RC}), \quad Q_2(t) = \frac{Q_0}{2}(e^{-t/RC} - e^{-t/3RC}).$$

We want to maximize $|Q_2|$, so setting the derivative to zero gives $t = \frac{3}{2}RC \log(3)$, so

$$\boxed{|Q_2|_{\max} = \frac{Q_0}{3\sqrt{3}}}.$$

[3] **Problem 11.** ⌚ USAPhO 2004, problem A1.

[3] **Problem 12** (Kalda). Three identical capacitors are placed in series and charged with a battery of emf \mathcal{E} . Once they are fully charged, the battery is removed, and simultaneously two resistors are connected as shown.



Find the heat dissipated on each of the resistors after a long time.

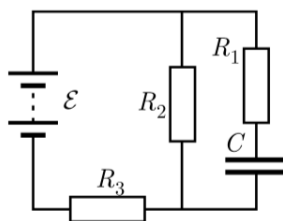
Solution. In the beginning, the charges on the plates are $\mathcal{E}C/3, -\mathcal{E}C/3, \mathcal{E}C/3, -\mathcal{E}C/3, \mathcal{E}C/3, -\mathcal{E}C/3$. After a long time, let the charges on the plates be $q_1, -q_1, q_2, -q_2, q_3, -q_3$. Note that all currents are 0 now, so we may effectively ignore the resistors and treat the wires as zero resistance. Therefore, the potential at points connected by wires is the same, so $q_1 = -q_2 = q_3$. Also, by charge conservation on the two disjoint pieces ($q_1, -q_2, q_3$ and $-q_1, q_2, -q_3$), we see

$$q_1 - q_2 + q_3 = \mathcal{E}C/3,$$

which implies $|q_1| = |q_2| = |q_3| = \mathcal{E}C/9$. The energy is $\sum \frac{1}{2}Q^2/C$, so the charges dropping by a factor of 3 means we lose $8/9$ of the original total energy, so each resistor dissipates $4/9$ of the original total energy. This is

$$\frac{4}{9} \cdot 3 \cdot \frac{(\mathcal{E}C/3)^2}{2C} = \boxed{\frac{2}{27}\mathcal{E}^2C}.$$

[3] **Problem 13** (Kalda). Find the time constant of the RC circuit shown below.



Solution. For the purposes of computing the time constant, it is equivalent to assume the capacitor is already charged, then take out the battery and see how it *discharges*. Thus all that matters is the resistance between the capacitor plates, which is

$$R = R_1 + \frac{R_2 R_3}{R_2 + R_3} = \frac{R_1 R_2 + R_1 R_3 + R_2 R_3}{R_2 + R_3},$$

$$\text{so } \tau = \boxed{C \frac{R_1 R_2 + R_1 R_3 + R_2 R_3}{R_2 + R_3}}.$$

[3] **Problem 14** (MPPP 175/176). A metal sphere of radius R has charge Q and hangs on an insulating cord. It slowly loses charge because air has a conductivity σ . In all cases, neglect any magnetic or radiation effects.

- Find the time for the charge to halve.
- You should have found that the time is independent of the radius R of the sphere, which follows directly from dimensional analysis. Can you show that, in fact, it is completely independent of the shape? (This doesn't just follow from dimensional analysis, because the shape might be described by dimensionless numbers, such as the eccentricity of an ellipsoid.)

- (c) Air has a conductivity of $\sigma \sim 10^{-13} \Omega^{-1}\text{m}^{-1}$, while water has a conductivity of $\sigma \sim 10^{-2} \Omega^{-1}\text{m}^{-1}$. About how long does the charge on an object last, if it is in air or water?

This problem generalizes USAPhO 2010, problem A2, which you can compare.

Solution. (a) We can analyze this as an RC circuit. (The circuit is completed by the “sphere at infinity”.) The capacitance is the self-capacitance of the sphere,

$$C = 4\pi\epsilon_0 R.$$

The resistance is the resistance between the sphere and infinity. The air can be thought of as a set of resistors in series, with each resistor being a spherical shell of air. Then

$$R_{\text{eq}} = \int dR = \frac{1}{\sigma} \int_R^\infty \frac{dr}{4\pi r^2} = \frac{1}{4\pi\sigma R}.$$

This gives a time constant of

$$\tau = RC = \frac{\epsilon_0}{\sigma}.$$

Therefore, the time is

$$t = \frac{\epsilon_0}{\sigma} \log 2.$$

- (b) Of course, dimensional analysis doesn't work, because there might be dimensionless parameters describing a general shape (e.g. the eccentricity of an ellipsoid). Instead we use the following more general argument. We note that


$$I = \oint \mathbf{J} \cdot d\mathbf{S}, \quad \Phi_E = \oint \mathbf{E} \cdot d\mathbf{S}$$

over any surface completely enclosing the object. The right-hand sides are related by $\mathbf{J} = \sigma\mathbf{E}$, and Gauss's law gives $\Phi_E = Q/\epsilon_0$. Combining these gives

$$\dot{Q} = -\frac{\sigma}{\epsilon_0} Q$$

so the charge decreases exponentially with timescale ϵ_0/σ , completely independently of the shape. (Of course, the sphere is still special, because with the sphere we are guaranteed there are *no* magnetism or radiation effects (why?). For a general shape, we have to assume these effects are negligible.)

- (c) The relevant timescale is ϵ_0/σ . Thus we find $t \sim 10$ s for air, and $t \sim 1$ ns for water.

[5] **Problem 15.**  IPhO 1993, problem 1. A really neat question with real-world relevance.

[5] **Problem 16.**  IPhO 2007, problem “orange”. A combination of mechanics and RC circuits.

3 Computing Magnetic Fields

Idea 4

The Biot–Savart law is

$$\mathbf{B} = \frac{\mu_0 I}{4\pi} \oint \frac{d\mathbf{s} \times \mathbf{r}}{r^3}.$$

As a consequence, we have Ampere’s law,

$$\oint \mathbf{B} \cdot d\mathbf{s} = \mu_0 I, \quad \nabla \times \mathbf{B} = \mu_0 \mathbf{J}$$

as well as Gauss’s law for magnetism,

$$\oint \mathbf{B} \cdot d\mathbf{S} = 0, \quad \nabla \cdot \mathbf{B} = 0.$$

Idea 5

The force on a stationary wire carrying current I in a magnetic field \mathbf{B} is

$$\mathbf{F} = I \int d\mathbf{s} \times \mathbf{B}.$$

The energy of a magnetic field is

$$U = \frac{1}{2\mu_0} \int B^2 dV.$$

The magnetic dipole moment of a planar current loop of area A and current I is $m = IA$, with \mathbf{m} directed perpendicular to the loop by the right-hand rule.

You should have already seen basic examples of using the Biot–Savart law in Halliday and Resnick, such as the field of a circular ring of current on its axis. We’ll start with some problems that are similarly straightforward, but more technically complex.

[3] Problem 17 (Purcell 6.11). A spherical shell with radius R and uniform surface charge density σ spins with angular frequency ω about a diameter.

- Find the magnetic field at the center.
- Find the magnetic dipole moment of the sphere.
- Sketch the magnetic field.

Solution. (a) First, we find the field due to a ring of counterclockwise current I with radius a in the $z = 0$ plane at a point directly above the center at some height z . Using the Biot–Savart law, we see that

$$\mathbf{B} = \frac{\mu_0 I}{4\pi} \frac{2\pi a \frac{a}{\sqrt{a^2+z^2}}}{a^2+z^2} \hat{\mathbf{z}} = \frac{\mu_0 I}{2} \frac{a^2}{(a^2+z^2)^{3/2}} \hat{\mathbf{z}}.$$

Let us work in spherical coordinates with the axis of rotation being the z axis. Then, at angle θ , we essentially have a ring of charge of radius $a = R \sin \theta$, $z = -R \cos \theta$, and

$$dI = \sigma R(d\theta)\omega(R \sin \theta) = \sigma R^2 \omega \sin \theta d\theta.$$

Therefore,

$$d\mathbf{B} = \frac{\mu_0 \sigma R^2 \omega \sin \theta d\theta}{2} \frac{R^2 \sin^2 \theta}{R^3} \hat{\mathbf{z}} = \frac{1}{2} \mu_0 \sigma \omega R \sin^3 \theta d\theta \hat{\mathbf{z}}.$$

Integrating from 0 to π to obtain the full field,

$$\mathbf{B} = \frac{1}{2} \mu_0 \sigma \omega R \hat{\mathbf{z}} \int_0^\pi \sin^3 \theta d\theta = \frac{2}{3} \mu_0 \sigma \omega R \hat{\mathbf{z}}.$$

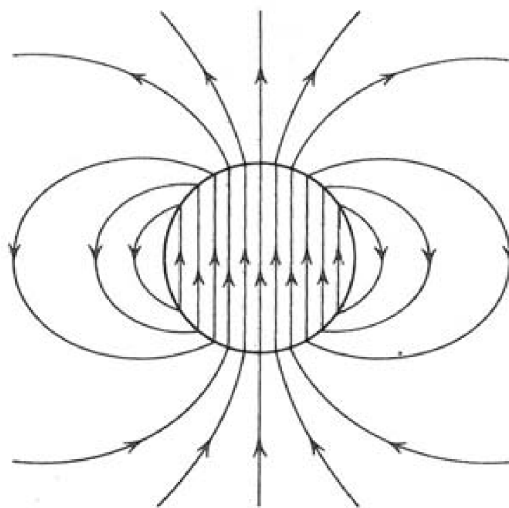
(b) The moment of a slice is

$$d\mathbf{m} = \hat{\mathbf{z}} \pi (R \sin \theta)^2 \omega \sigma R^2 \sin \theta d\theta.$$

Integrating this gives

$$\mathbf{m} = \frac{4}{3} \pi \omega \sigma R^4 \hat{\mathbf{z}}.$$

(c) The field is as shown below.



This is an example of a magnetic dipole field. Note that it looks very similar to an electric dipole field far away, but inside the dipole the field points along the dipole moment, rather than against it. This is necessary to make the magnetic field lines form closed loops, and hence obey Gauss's law for magnetism.

One unexpected feature is that the field is perfectly uniform inside, which is very difficult to show starting from the Biot–Savart law. It's easier to use a tool called the vector potential (which is the analogue of the electric potential, but for magnetic fields), solve for the vector potential, and take its curl to get the magnetic field. Along the way, it turns out that the vector potential integral simplifies dramatically, leading to the uniform field. Ultimately, it's the same simplification as occurs for the electric potential when proving the shell theorem. If you want to see this full story, see section 5.4 of Griffiths.

[2] **Problem 18** (Purcell 6.12). A ring with radius R carries a current I . Show that the magnetic field due to the ring, at a point in the plane of the ring, a distance r from the center, is given by

$$B = \frac{\mu_0 I}{2\pi} \int_0^\pi \frac{(R - r \cos \theta) R d\theta}{(r^2 + R^2 - 2rR \cos \theta)^{3/2}}.$$

In the $r \gg R$ limit, show that

$$B \approx \frac{\mu_0 m}{4\pi r^3}$$

where $m = IA$ is the magnetic dipole moment of the ring.

Solution. Let the ring be centered at the origin, and let the field point be $a\hat{\mathbf{x}}$, and say we are at an angle θ . Then, $d\mathbf{l} = (-R \sin \theta) \hat{\mathbf{x}} + (R \cos \theta) \hat{\mathbf{y}}$, and

$$\mathbf{r} = a\hat{\mathbf{x}} - R(\cos \theta \hat{\mathbf{x}} + \sin \theta \hat{\mathbf{y}}) = (a - R \cos \theta) \hat{\mathbf{x}} + (-R \sin \theta) \hat{\mathbf{y}}.$$

Note that $r = |\mathbf{r}| = \sqrt{a^2 + R^2 - 2aR \cos \theta}$. Therefore, by the Biot–Savart law,

$$d\mathbf{B} = \frac{\mu_0 I}{4\pi} \frac{R(R - a \cos \theta) \hat{\mathbf{z}} d\theta}{(a^2 + R^2 - 2aR \cos \theta)^{3/2}},$$

so integrating from 0 to 2π and noting that θ and $-\theta$ contribute the same, we arrive at the desired result. Now, to take the $r \gg R$ limit cleanly and consistently, it's best to nondimensionalize everything. Defining $x = R/r \ll 1$, we can pull dimensionful factors out of the integral to get

$$B = \frac{\mu_0 I r R}{2\pi r^3} \int_0^\pi \frac{x - \cos \theta}{(1 + x^2 - 2x \cos \theta)^{3/2}} d\theta.$$

Now, it's not immediately obvious to what order in x we should expand in. If we already know the answer is proportional to $1/r^3$, then we can see the answer must be first order in x . But if we didn't know that, we could expand to zeroth order, giving

$$B = \frac{\mu_0 I R}{2\pi r^2} \int_0^\pi (-\cos \theta) d\theta = 0.$$

The fact that the answer vanishes means we need to go to higher order to find the true answer. At first order, applying the binomial theorem, the integrand is

$$(x - \cos \theta)(1 + x^2 - 2x \cos \theta)^{-3/2} \approx (x - \cos \theta)(1 + 3x \cos \theta) \approx -\cos \theta + x(1 - 3 \cos^2 \theta)$$

where we threw away higher order terms throughout. Then

$$B = \frac{\mu_0 I R^2}{2\pi r^3} \int_0^\pi (1 - 3 \cos^2 \theta) d\theta.$$

Using the fact that $\cos^2 \theta$ averages to $1/2$ over a cycle, the integral is $-\pi/2$, giving

$$B = \frac{\mu_0 I \pi R^2}{4\pi r^3} = \frac{\mu_0 m}{4\pi r^3}$$

as desired.

- [3] **Problem 19** (Purcell 6.14). Consider a square loop with current I and side length a centered at the origin. Show that the magnetic field at \mathbf{r} , where $r \gg a$ and \mathbf{r} is parallel to one of the square's sides, is $B \approx (\mu_0/4\pi)(m/r^3)$ as in the previous problem. Be careful with factors of 2!

Solution. This calculation is a bit subtle. It is tempting to ignore the vertical portions of the square, because the current is almost parallel to \mathbf{r} , so $d\mathbf{s} \times \mathbf{r}$ is small; more precisely, it is suppressed by a power of a/r . The horizontal portions each give much larger contributions. However, the horizontal sides give opposite contributions and nearly cancel out, so it turns out that the vertical portions contribute significantly to the final answer, which contains one overall factor of a/r .

First consider the vertical segments. We get a factor of $(a/2)/r$ from the $\sin \theta$ factor in the cross product. Similarly, a appears in the Biot–Savart integral in the denominator; however, its effect here would give higher-order terms in a/r , which we don't want. So the vertical segments each contribute

$$B = -\frac{\mu_0 I}{4\pi} \frac{a^{a/2}}{r^2}$$

and hence the total contribution from them is

$$B = -\frac{\mu_0 I}{4\pi} \frac{a^2}{r^3}.$$

The horizontal ones sides contribute, to the same order in a/r ,

$$\frac{\mu_0 I}{4\pi} \frac{a}{(r-a)^2}, \quad -\frac{\mu_0 I}{4\pi} \frac{a}{(r+a)^2}$$

where here we had to include a in the denominator, because there isn't an a/r suppression factor in the numerator. Now adding the two, at leading order in a/r we get

$$B = \frac{\mu_0 I}{4\pi} \frac{2a^2}{r^3}.$$

Adding the horizontal and vertical contributions yields the correct result. If one forgets the vertical contributions, one gets an answer that is two times too big.

Idea 6

The results you have found above, for the fields far from currents, are special cases of the general magnetic dipole field: far from a magnetic dipole with magnetic moment m , its magnetic field is just the same as the electric field of an electric dipole,

$$\mathbf{B}(\mathbf{r}) = \frac{\mu_0 m}{4\pi r^3} (2 \cos \theta \hat{\mathbf{r}} + \sin \theta \hat{\boldsymbol{\theta}}) = \frac{\mu_0}{4\pi r^3} (3(\mathbf{m} \cdot \hat{\mathbf{r}})\hat{\mathbf{r}} - \mathbf{m}).$$

As with the electric dipole field, you don't need to memorize this result, but you should remember that it's proportional to the dipole moment, falls off as $1/r^3$, and be able to sketch it. Of course, static electric and magnetic fields behave differently; when you get inside an electric dipole the field reverses direction, but this isn't true for a magnetic dipole.

[3] **Problem 20.**  USAPhO 2012, problem A3.

We now give a few arguments for computing fields using symmetry.

Example 5: PPP 31

An electrically charged conducting sphere “pulses” radially, i.e. its radius changes periodically with a fixed amplitude. What is the net pattern of radiation from the sphere?

Solution

There is no radiation. By spherical symmetry, the magnetic field can only point radially. But then this would produce a magnetic flux through a Gaussian sphere centered around the pulsing sphere, which would violate Gauss’s law for magnetism. So there is no magnetic field at all, and since radiation always needs both electric and magnetic fields (as you’ll see in **E7**), there is no radiation at all. In fact, outside the sphere the electric field is always exactly equal to $Q/4\pi\epsilon_0r^2$, in accordance with Coulomb’s law.

Example 6

Find the magnetic field of a very long cylindrical solenoid, of radius R and n turns per unit length, carrying current I .

Solution

Orient the solenoid along the vertical direction and use cylindrical coordinates. By symmetry, the field must be independent of z . Now consider the radial component of the magnetic field B_r . Turning the solenoid upside-down is equivalent to reversing the current. But the former does not flip B_r while the latter does, so we must have $B_r = 0$.

Now, by rotational symmetry, the tangential component B_ϕ must be uniform. But then Ampere’s law on any circular loop gives $B_\phi(2\pi r) = 0$, so we must have $B_\phi = 0$ as well.

The only thing left to consider is B_z . By applying Ampere’s law to small vertical rectangles, we see that B_z is constant unless that rectangle crosses the surface of the solenoid. Furthermore, B_z must be zero far from the solenoid, so it must be zero everywhere outside the solenoid. Now, for a rectangle of height h that does cross the surface, Ampere’s law gives

$$\oint \mathbf{B} \cdot d\mathbf{s} = B_z^{\text{in}}h = \mu_0 I_{\text{enc}} = \mu_0 n I h$$

which tells us that $B_z^{\text{in}} = \mu_0 n I$.

Remark

The above analysis is not quite how real solenoids behave for several reasons. First, we didn’t account for the discreteness of the wires. We just treated them as forming a uniform current per length $K = nI$, which is how we wrote $I_{\text{enc}} = nIh$. This is valid when you don’t care about looking too close to the wires themselves.

The fact that solenoids are made by winding real wires means there is another contribution

to the current, even in the limit $n \rightarrow \infty$. The wires are wound with a small slope, since a net current I still has to move along the solenoid. Another way of saying this is that the current per length along the solenoid surface is $\mathbf{K} = nI\hat{\theta} + (I/2\pi R)\hat{z}$. This causes a tangential magnetic field $B_\phi = \mu_0 I/2\pi r$ outside the solenoid.

Another factor is that a real solenoid isn't infinitely long, and end effects are important. You'll analyze these in a slick way in problem 22.

[2] **Problem 21.** A toroidal solenoid is created by wrapping N turns of wire around a torus with a rectangular cross section. The height of the torus is h , and the inner and outer radii are a and b .

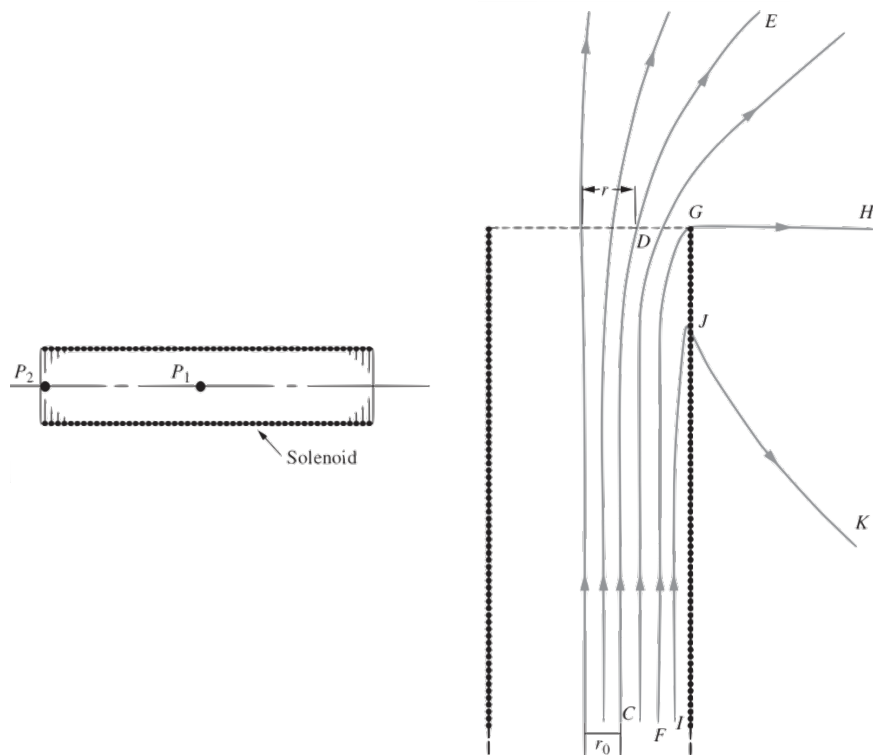
- (a) In the ideal case, the magnetic field vanishes everywhere outside the toroid, and is purely tangential inside the toroid. Find the magnetic field inside the toroid.
- (b) There is another small contribution to the magnetic field due to the winding effect mentioned above. Roughly what does the resulting extra magnetic field look like? If you didn't want this additional field, how would you design the solenoid to get rid of it?

Solution. (a) Applying Ampere's law on a circular loop gives $B(r)(2\pi r) = \mu_0 NI$, so

$$B(r) = \frac{\mu_0 NI}{2\pi r}.$$

- (b) Note that the twisting of the wire adds an effective small current in the tangential direction. This looks like a current loop, so, e.g. it produces a magnetic field pointing vertically through the toroid's hole. We can remove it by using a bunch of current loops instead of a single winding wire, or by using counterwinding: after winding the wire around the toroid once clockwise, wind it around again counterclockwise.

[3] **Problem 22** (Purcell 6.63). A number of simple facts about the fields of solenoids can be found by using superposition. The idea is that two solenoids of the same diameter, and length L , if joined end to end, make a solenoid of length $2L$. Two semi-infinite solenoids butted together make an infinite solenoid, and so on.



Prove the following facts.

- In the finite-length solenoid shown at left above, the magnetic field on the axis at the point P_2 at one end is approximately half the field at the point P_1 in the center. (Is it slightly more than half, or slightly less than half?)
- In the semi-infinite solenoid shown at right above, the field line FGH , which passes through the very end of the winding, is a straight line from G out to infinity.
- The flux through the end face of the semi-infinite solenoid is half the flux through the coil at a large distance back in the interior.
- Any field line that is a distance r_0 from the axis far back in the interior of the coil exits from the end of the coil at a radius $r_1 = \sqrt{2}r_0$, assuming $\sqrt{2}r_0$ is less than the solenoid radius.

Part (c) tells us that even in an ideal solenoid, we always lose at least half the flux to fringing!

Solution. (a) Glue two of them together. Now, $2\mathbf{B}_2 = \mathbf{B}_1 + \epsilon$ for some small ϵ . Then, we have that $\mathbf{B}_2 = \frac{1}{\mathbf{B}_1} + \epsilon/2$, so it is slightly more than half.

- Let G' be the reflection of G in the axis. Say the field line GH comes out at an angle θ . Then, at G' , it also comes out with an angle θ . Now, making a copy and rotating 180° and flipping the current direction, the field at G becomes one pointing at θ above the horizontal (coming from G at the original), and one at angle $\pi - \theta$ to the horizontal (coming from G' in the copy). Therefore, the field there would be non-zero right outside the solenoid, unless $\theta = 0$, in which case the fields cancel.
- Do the same procedure as in (a), and the flux at the glue points gets doubled to what it was originally. However, now we have an infinite solenoid, so double the flux through the end is equal to the flux in the middle.

- (d) Note that (c) holds even if we take a constant disk of radius a as our surface to take the flux over. Note that the flux through the disk at the edge with radius r is the same as at the middle with radius r_0 (same field lines). However, if we draw a disk of radius r at the middle, it will have twice the flux as it did at the top, or twice the flux as with r_0 . However, here in the middle, the magnetic field is essentially constant, so the areas must be twice each other, so $\pi r^2 = 2\pi r_0^2$, or $r = \sqrt{2}r_0$.

[3] **Problem 23** (MPPP 160). Two infinite parallel wires, a distance d apart, carry electric currents with equal magnitudes but opposite directions. In this problem, we find the shape of the magnetic field lines using a neat trick.

- (a) Argue that if we rotated \mathbf{B} by 90° at each point, it would produce a valid electrostatic field \mathbf{E} . (Hint: consider what happens when we rotate the \mathbf{B} field of a single wire, first.)
- (b) Argue that the field lines of \mathbf{B} are the same as the equipotentials of this artificial \mathbf{E} , and use this to find the field lines.

This is a common trick used when working with vortices in two dimensions, where it converts vortices to sources and sinks.

Solution. (a) First, we can get the intuition using a single wire. In this case,

$$\mathbf{B} = \frac{\mu_0 I}{2\pi r} \hat{\boldsymbol{\theta}}$$

in cylindrical coordinates. Upon a 90° rotation, $\hat{\boldsymbol{\theta}}$ turns into $\hat{\mathbf{r}}$, giving

$$\mathbf{E} = \frac{\mu_0 I}{2\pi r} \hat{\mathbf{r}}.$$

Of course, this is a purely formal idea, since electric and magnetic fields don't even have the same units. Now note that this is precisely the electric field of an infinite, uniform line charge, if it had a linear charge density $\lambda = \mu_0 \epsilon_0 I$. So it's a valid electric field, and the same would be true if we had started from two wires, by superposition.

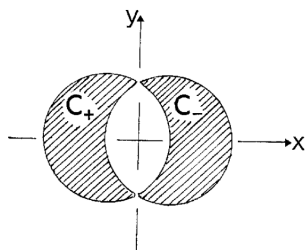
- (b) The field lines of \mathbf{B} are always parallel to \mathbf{B} . Now, this artificial \mathbf{E} is always perpendicular to \mathbf{B} , and equipotentials are always perpendicular to \mathbf{E} , so the equipotentials follow the magnetic field lines.

On the other hand, we know precisely what the potential is in this problem. By integrating the $1/r$ field, the potential is proportional to $\log r$, so

$$V(r) \propto \log(r_+) - \log(r_-) = \log(r_+/r_-)$$

where r_+ and r_- are the distances to the two wires. So the equipotentials have constant r_+/r_- . We've already found, when investigating the method of images for spheres in **E2**, that this implies the equipotentials are *circles*, specifically circles of Apollonius. So the magnetic field lines are circles!

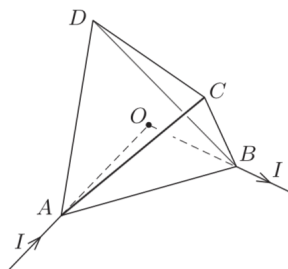
[2] **Problem 24** (IPhO 1996). Two straight, long conductors C_+ and C_- , insulated from each other, carry current I in the positive and the negative $\hat{\mathbf{z}}$ direction respectively. The cross sections of the conductors are circles of diameter D in the xy plane, with a distance $D/2$ between the centers.



The current in each conductor is uniformly distributed. Find the magnetic field in the space between the conductors.

Solution. See page 12 of the official solutions [here](#).

- [3] **Problem 25** (MPPP 157). A regular tetrahedron is made of a wire with constant resistance per unit length. A current I is sent into one vertex and removed from another vertex, as shown.



Find the magnetic field at the center of the tetrahedron.


Solution. By symmetry C and D are at the same potential, so $I_{DC} = 0$. Then the current from A to B just splits up into three branches, which have resistances $R_{ACB} = R_{ADB} = 2R_{AB}$. Therefore, the currents are

$$I_{AB} = \frac{1}{2}I, \quad I_{AC} = I_{AD} = I_{CB} = I_{DB} = \frac{1}{4}I.$$

The field at O due to the current along AD is directed along the vector \overrightarrow{CB} . Similarly, the magnetic field due to the current along AC is directed along \overrightarrow{BD} , and so on. By repeating this reasoning for all five contributions, we find that the magnetic field at O is proportional to

$$2\overrightarrow{DC} + \overrightarrow{BD} + \overrightarrow{CB} + \overrightarrow{AD} + \overrightarrow{CA} = 2\overrightarrow{DC} + \overrightarrow{CD} + \overrightarrow{CD} = 0$$

so there is no field at O .

- [5] **Problem 26.**  APhO 2013, problem 1. A neat question on a cylindrical RC circuit that uses many of the techniques we've covered so far.